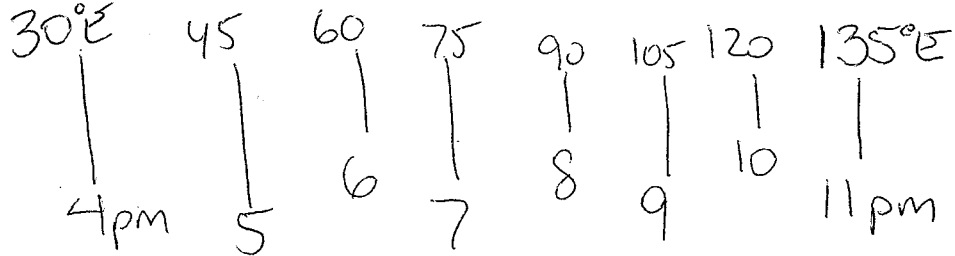


Key


EVEN MORE Time Problems – Extra Help

1. If it is 11 pm at 135° East longitude and it is 4 pm at your longitude where are you located?

30°E



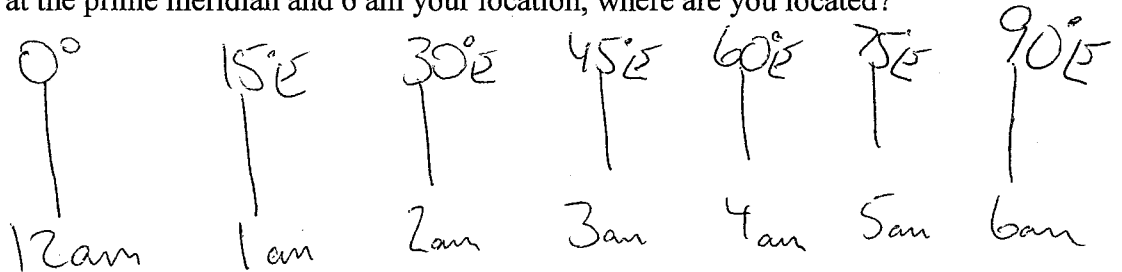
2. You are located at 75° West longitude and it is 9 am, what time would it be at 15° West longitude?



1pm


3. It is 12 am at the prime meridian and 6 am your location, where are you located?

90°E




4. You are located at 105° West longitude and it is 7 am, what time would it be at 15° East longitude?

3pm




5. If it is 8 pm at 15° East longitude and it is 4 pm at your longitude where are you located?

45°W

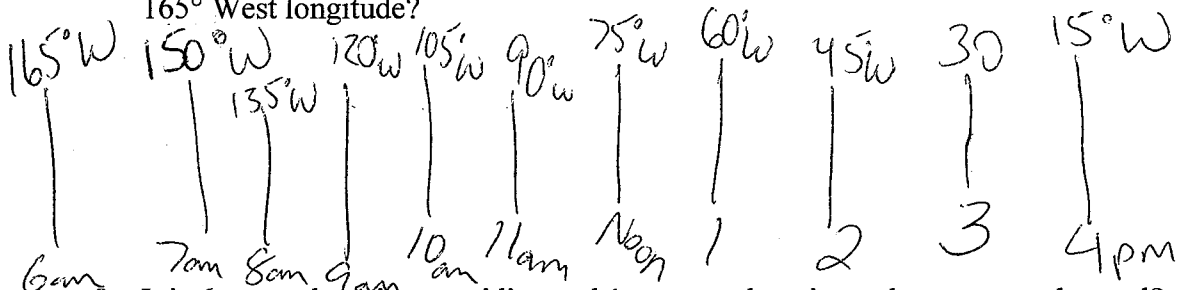


6. If it is 8 am at 30° East longitude and it is 3 pm at your longitude where are you located?

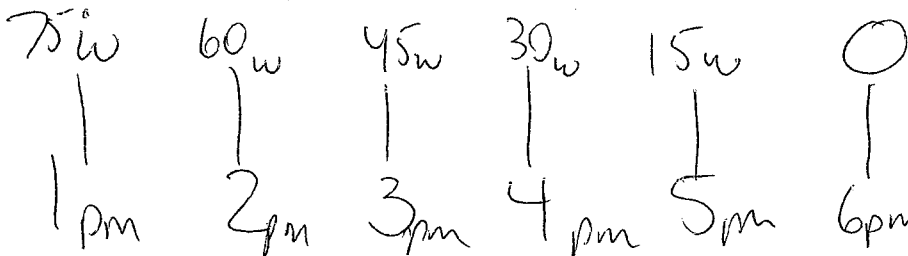
135°E



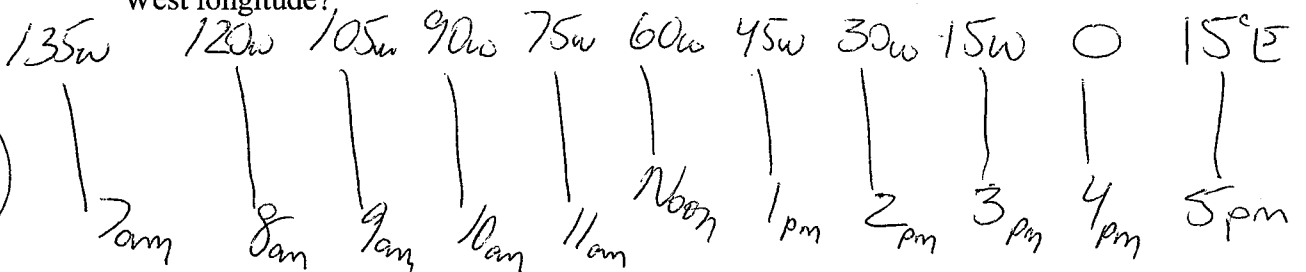
7. You are located at 15° West longitude and it is 4 pm, what time would it be at 165° West longitude?



8. It is 6 pm at the prime meridian and 1 pm your location, where are you located?



9. You are located at 15° East longitude and it is 5 pm, what time would it be at 135° West longitude?



10. If it is 6 pm at 75° West longitude and it is 11 pm at your longitude where are you located?

